

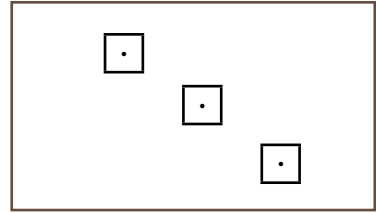
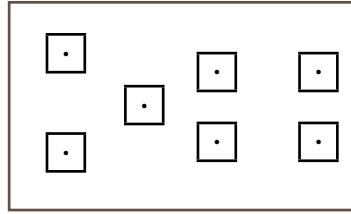
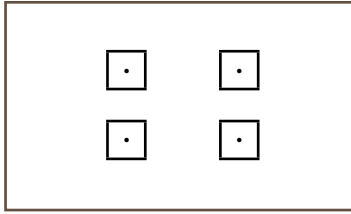
Y _____ /20 p.

K _____ /20 p.

S _____ /20 p.

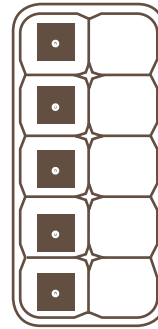
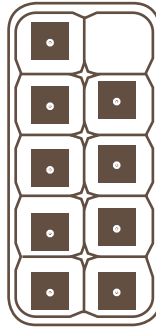
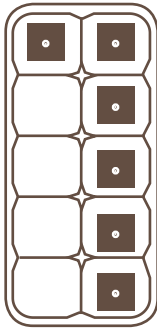
Nähnyt: _____

1. Mer-kit-se lu-ku.



_____/3 p.

2. Mer-kit-se lu-ku.



_____/3 p.

3. Vä-ri-tä yh-dis-tel-mät. Mer-kit-se lu-vut.

<input type="text"/>	<input type="text"/>	<input type="text"/>	<input type="text"/>	<input type="text"/>	<input type="text"/>	<input type="text"/>	<input type="text"/>
<input type="text"/>	<input type="text"/>	<input type="text"/>	<input type="text"/>	<input type="text"/>	<input type="text"/>	<input type="text"/>	<input type="text"/>
<input type="text"/>	<input type="text"/>	<input type="text"/>	<input type="text"/>	<input type="text"/>	<input type="text"/>	<input type="text"/>	<input type="text"/>
<input type="text"/>	<input type="text"/>	<input type="text"/>	<input type="text"/>	<input type="text"/>	<input type="text"/>	<input type="text"/>	<input type="text"/>
<input type="text"/>	<input type="text"/>	<input type="text"/>	<input type="text"/>	<input type="text"/>	<input type="text"/>	<input type="text"/>	<input type="text"/>
<input type="text"/>	<input type="text"/>	<input type="text"/>	<input type="text"/>	<input type="text"/>	<input type="text"/>	<input type="text"/>	<input type="text"/>

_____/14 p.

Y ____/20 p. K ____/20 p. S ____/20 p. Nähnyt: _____

1. Mer-kit-se lu-ku.

<table border="1" style="width: 50px; height: 50px; text-align: center;"> <tr><td> </td><td> </td></tr> <tr><td>K</td><td>Y</td></tr> </table>			K	Y	<table border="1" style="width: 50px; height: 50px; text-align: center;"> <tr><td> </td><td> </td></tr> <tr><td>K</td><td>Y</td></tr> </table>			K	Y	<table border="1" style="width: 50px; height: 50px; text-align: center;"> <tr><td> </td><td> </td></tr> <tr><td>K</td><td>Y</td></tr> </table>			K	Y
K	Y													
K	Y													
K	Y													

_____/3 p.

2. Mer-kit-se lu-ku.

<table border="1" style="width: 50px; height: 50px; text-align: center;"> <tr><td> </td><td> </td></tr> <tr><td>K</td><td>Y</td></tr> </table>			K	Y	<table border="1" style="width: 50px; height: 50px; text-align: center;"> <tr><td> </td><td> </td></tr> <tr><td>K</td><td>Y</td></tr> </table>			K	Y	<table border="1" style="width: 50px; height: 50px; text-align: center;"> <tr><td> </td><td> </td></tr> <tr><td>K</td><td>Y</td></tr> </table>			K	Y
K	Y													
K	Y													
K	Y													

_____/3 p.

3. La-jit-te-le lu-ku-yk-si-köt. Yh-dis-tä lu-ku.

<p>lu-ku-mää-rä</p>	<p>lu-ku-yk-si-köt</p> <table border="1" style="width: 50px; height: 50px; text-align: center;"> <tr><td> </td><td> </td></tr> <tr><td>K</td><td>Y</td></tr> </table>			K	Y	+	<table border="1" style="width: 50px; height: 50px; text-align: center;"> <tr><td> </td><td> </td></tr> <tr><td> </td><td>Y</td></tr> </table>				Y	=	<p>lu-ku</p> <table border="1" style="width: 50px; height: 50px; text-align: center;"> <tr><td> </td><td> </td></tr> <tr><td>K</td><td>Y</td></tr> </table>			K	Y
K	Y																
	Y																
K	Y																
<p>lu-ku-mää-rä</p>	<p>lu-ku-yk-si-köt</p> <table border="1" style="width: 50px; height: 50px; text-align: center;"> <tr><td> </td><td> </td></tr> <tr><td>K</td><td>Y</td></tr> </table>			K	Y	+	<table border="1" style="width: 50px; height: 50px; text-align: center;"> <tr><td> </td><td> </td></tr> <tr><td> </td><td>Y</td></tr> </table>				Y	=	<p>lu-ku</p> <table border="1" style="width: 50px; height: 50px; text-align: center;"> <tr><td> </td><td> </td></tr> <tr><td>K</td><td>Y</td></tr> </table>			K	Y
K	Y																
	Y																
K	Y																

_____/6 p.

4. Yh-dis-tä lu-ku-yk-si-köt. Piir-rä lu-ku-mää-rä pa-li-koi-na.

<table border="1" style="width: 100%; height: 100%;"></table>	<table border="1" style="width: 100%; height: 100%;"></table>								
$50 + 4 =$ <table border="1" style="width: 50px; height: 50px; text-align: center;"> <tr><td> </td><td> </td></tr> <tr><td>K</td><td>Y</td></tr> </table>			K	Y	$30 + 5 =$ <table border="1" style="width: 50px; height: 50px; text-align: center;"> <tr><td> </td><td> </td></tr> <tr><td>K</td><td>Y</td></tr> </table>			K	Y
K	Y								
K	Y								

_____/4 p.

5. Yh-dis-tä lu-ku-yk-si-köt.

$80 + 1 =$ <table border="1" style="width: 50px; height: 50px; text-align: center;"> <tr><td> </td><td> </td></tr> <tr><td>K</td><td>Y</td></tr> </table>			K	Y	$10 + 8 =$ <table border="1" style="width: 50px; height: 50px; text-align: center;"> <tr><td> </td><td> </td></tr> <tr><td>K</td><td>Y</td></tr> </table>			K	Y	$70 + 2 =$ <table border="1" style="width: 50px; height: 50px; text-align: center;"> <tr><td> </td><td> </td></tr> <tr><td>K</td><td>Y</td></tr> </table>			K	Y	$60 + 7 =$ <table border="1" style="width: 50px; height: 50px; text-align: center;"> <tr><td> </td><td> </td></tr> <tr><td>K</td><td>Y</td></tr> </table>			K	Y
K	Y																		
K	Y																		
K	Y																		
K	Y																		

_____/4 p.

Y _____ /20 p. K _____ /20 p. S _____ /20 p. Nähtyt: _____

1. Merkitse luku.

sadat	kymmenet	ykköset	sadat	kymmenet	ykköset	sadat	kymmenet	ykköset
S	K	Y	S	K	Y	S	K	Y

2. Piirrä luku ja merkitse.

_____ /3 p.

261	524	321						
S	K	Y	S	K	Y	S	K	Y

3. Lajittele lukuyksiköt. Yhdistä luku.

_____ /3 p.

lukumäärä lukuyksiköt $\begin{array}{|c|c|c|} \hline & & \\ \hline S & K & Y \\ \hline \end{array}$ + $\begin{array}{|c|c|} \hline & \\ \hline K & Y \\ \hline \end{array}$ + $\begin{array}{|c|} \hline \\ \hline Y \\ \hline \end{array}$ = luku $\begin{array}{|c|c|c|} \hline & & \\ \hline S & K & Y \\ \hline \end{array}$

_____ /6 p.

4. Yhdistä lukuyksiköt.

lukumäärä lukuyksiköt $\begin{array}{|c|c|c|} \hline & & \\ \hline S & K & Y \\ \hline \end{array}$ + $\begin{array}{|c|c|} \hline & \\ \hline K & Y \\ \hline \end{array}$ + $\begin{array}{|c|} \hline \\ \hline Y \\ \hline \end{array}$ = luku $\begin{array}{|c|c|c|} \hline & & \\ \hline S & K & Y \\ \hline \end{array}$

_____ /4 p.

5. Merkitse luku.

sataseitsemäntoista $\begin{array}{|c|c|c|} \hline & & \\ \hline \end{array}$ kolmesataaviisitoista $\begin{array}{|c|c|c|} \hline & & \\ \hline \end{array}$
 tuhatyksi $\begin{array}{|c|c|c|c|} \hline & & & \\ \hline \end{array}$ satakahdeksankymmentäkaksi $\begin{array}{|c|c|c|} \hline & & \\ \hline \end{array}$

$400 + 10 + 2 = \begin{array}{|c|c|c|} \hline & & \\ \hline S & K & Y \\ \hline \end{array}$
 $300 + 40 + 0 = \begin{array}{|c|c|c|} \hline & & \\ \hline S & K & Y \\ \hline \end{array}$
 $700 + 10 + 7 = \begin{array}{|c|c|c|} \hline & & \\ \hline S & K & Y \\ \hline \end{array}$
 $600 + 70 + 3 = \begin{array}{|c|c|c|} \hline & & \\ \hline S & K & Y \\ \hline \end{array}$

_____ /4 p.